

PATTERN & MARKING SCHEME			
Section	(1) Logical Reasoning	(2) Science	(3) Achievers Section
No. of Questions	5	25	5
Marks per Ques.	1	1	2

**SYLLABUS**

**Section – 1 :** Patterns, Odd One Out, Measuring Units, Geometrical Shapes, Spatial Understanding, Grouping, Analogy, Ranking Test, Problems based on Figures.

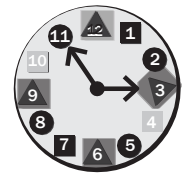
**Section – 2 :** Living and Non-living Things, Plants, Animals, Human Beings and Their Needs, Good Habits and Safety Rules, Air and Water, Weather and The Sky.

**Section – 3 :** Higher Order Thinking Questions - Syllabus as per Section – 2

**REASONING**

1. The missing shape in the given clock is \_\_\_\_\_.

- (A) Circle
- (B) Triangle
- (C) Square
- (D) Rectangle



2.  related to , then 4 is related to \_\_\_\_\_.

- (A) 
- (B) 
- (C) 
- (D) 

3. Sanchit wakes up in the \_\_\_\_\_ to go to school.

- (A) Morning
- (B) Night
- (C) Afternoon
- (D) Evening



SCIENCE

4. Look at the picture and complete the following sentence.  
Always cross the road at \_\_\_\_\_ crossing.

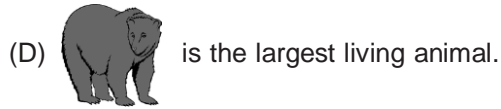
- (A) Horse
- (B) Zebra
- (C) Footpath
- (D) Traffic



5. \_\_\_\_\_ is a living thing because \_\_\_\_\_.

- (A) It grows
- (B) It can make more sunflower plants
- (C) It breathes
- (D) All of these

6. Select the correct option.



7. Which part of our body helps us to see a flower?

- (A) Eye (B) Nose (C) Ear (D) Tongue

8. Choose the correct sequence of words to complete the paragraph given below.

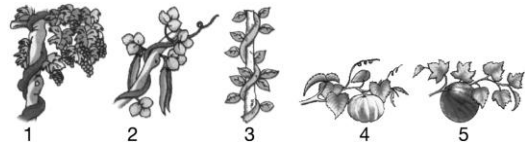
Summer days are \_\_\_\_\_ while winter days are \_\_\_\_\_. A strong wind blows on \_\_\_\_\_.  
Monsoon days are \_\_\_\_\_.

- (A) Cold, hot, a windy day, rainy (B) Rainy, cold, a hot day, windy  
(C) Hot, cold, a windy day, rainy (D) Windy, hot, a rainy day, cold

### ACHIEVERS SECTION

9. Which among the following are creepers?


- (A) 1, 2, 3  
(B) 4, 5  
(C) 1, 4, 5  
(D) 1, 2, 3, 4 and 5



10. Richa did an activity as shown here. She observed bubbles coming out of the glass. What does this activity show?



She took an empty glass.



She tilted the glass and slowly pushed it down into a tub of water.

- (A) The empty glass is filled with air.  
(B) Water displaces air in the glass.  
(C) Air comes out of the water in the form of bubbles.  
(D) All of these

SPACE FOR ROUGH WORK

### ANSWERS

1. (D) 2. (C) 3. (A) 4. (B) 5. (D) 6. (C) 7. (A) 8. (C) 9. (B) 10. (D)